

# SEGUNDO TRIMESTRE

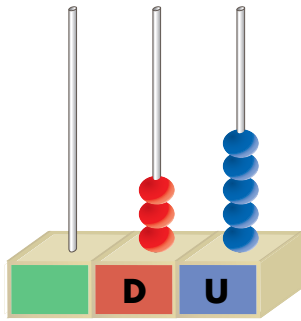
## Unidad 2. Matemáticas

AR

Nombre y apellidos: .....

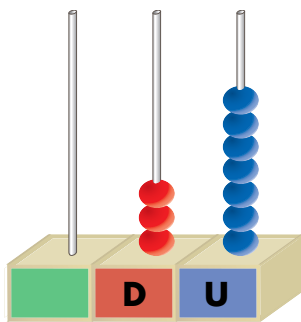
Curso: ..... Fecha: .....

 Completa.




decenas y  unidades

+  =



decenas y  unidades

+  =

 Suma y resta.

$$\begin{array}{r} 24 \\ + 15 \\ \hline \square \end{array}$$

$$\begin{array}{r} 17 \\ + 10 \\ \hline \square \end{array}$$

$$\begin{array}{r} 34 \\ + 5 \\ \hline \square \end{array}$$

$$\begin{array}{r} 28 \\ + 11 \\ \hline \square \end{array}$$

$$\begin{array}{r} 9 \\ - 5 \\ \hline \square \end{array}$$

$$\begin{array}{r} 4 \\ - 4 \\ \hline \square \end{array}$$

$$\begin{array}{r} 6 \\ - 4 \\ \hline \square \end{array}$$

$$\begin{array}{r} 4 \\ - 0 \\ \hline \square \end{array}$$