

# SUMAS SIN LLEVAR

Nombre: \_\_\_\_\_ Fecha: \_\_\_\_\_

## 1.- Suma

$$\begin{array}{r} 43 \\ + 35 \\ \hline \end{array}$$





$$\begin{array}{r} 52 \\ + 46 \\ \hline \end{array}$$

$$\begin{array}{r} 61 \\ + 17 \\ \hline \end{array}$$

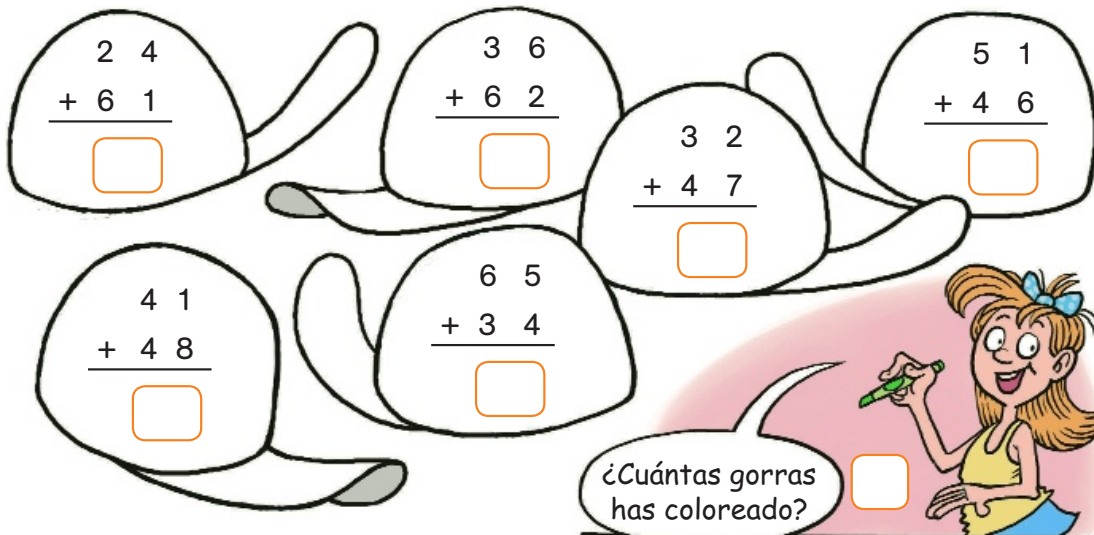
$$\begin{array}{r} 62 \\ + 6 \\ \hline \end{array}$$

$$\begin{array}{r} 7 \\ + 81 \\ \hline \end{array}$$

## 2.- Coloca los números y suma





















## 3.- Calcula y colorea de verde las gorras con un resultado mayor que 90




4.- ¿Cuántos bolos hay? Observa el dibujo y calcula



 y 	 y 	 y 
		
 y 	 y 	 y 
		

5.- Resuelve

Hay 34 jarrones pintados y 12 sin pintar. ¿Cuántos jarrones hay en total?





---



---

Hay 25 bombillas encendidas y 13 apagadas. ¿Cuántas bombillas hay en total?




---



---