

# TERCER TRIMESTRE

## Unidad 2. Matemáticas


AA

Nombre y apellidos: .....


Curso: ..... Fecha: .....


 Dibuja:

3 círculos azules

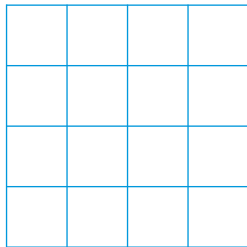


2 circunferencias verdes




 Coloca y multiplica.

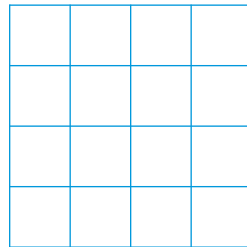
$2 \times 6$



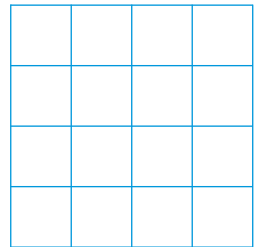
$3 \times 4$




$5 \times 3$




$4 \times 6$



 Problema.



Juan, Luz y Raúl compran rosquillas.  
¿Cuántas han comprado entre los tres?



Han comprado  rosquillas.