

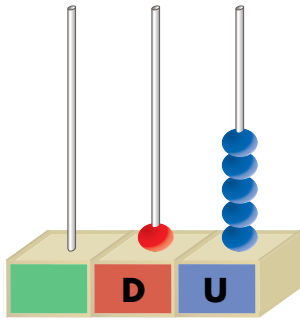
**PRIMER TRIMESTRE**  
**Unidad 4. Matemáticas**

**AA**

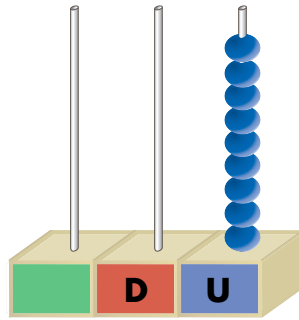
Nombre y apellidos: .....

Curso: ..... Fecha: .....

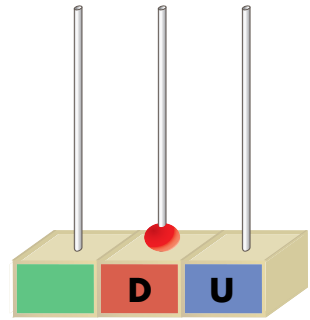
*Cuenta y completa.*



D	U



D	U



D	U

*Calcula y relaciona.*

$7 + 3 = \square$

$$\begin{array}{r} 4 \\ + 4 \\ \hline \square \end{array}$$

$\square$  6

$4 + 4 = \square$

$$\begin{array}{r} 8 \\ - 2 \\ \hline \square \end{array}$$

$\square$  10

$8 - 2 = \square$

$$\begin{array}{r} 7 \\ + 3 \\ \hline \square \end{array}$$

$\square$  8