


SUMAS LLEVANDO


Nombre: _____ Fecha: _____

1.- Coloca los números y calcula


$36 + 29$




$47 + 16$




$58 + 37$




$79 + 15$




$32 + 6 + 15$




$41 + 29 + 8$



$7 + 53 + 36$




$9 + 65 + 23$




2.- ¿Cuántos puntos hay en total? Calcula


$34 + 13 + 29$




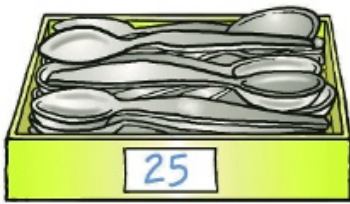
$63 + 9 + 17$




$8 + 75 + 16$




3.- Observa el dibujo y calcula




¿Cuántas cucharas y tenedores hay?



¿Cuántas cucharas y cuchillos hay?



¿Cuántas cucharas, tenedores y cuchillos hay?



4.- Lee y calcula

Rebeca ha sumado dos de estos números y ha obtenido como resultado un número mayor que 52. ¿Qué dos números ha sumado?

