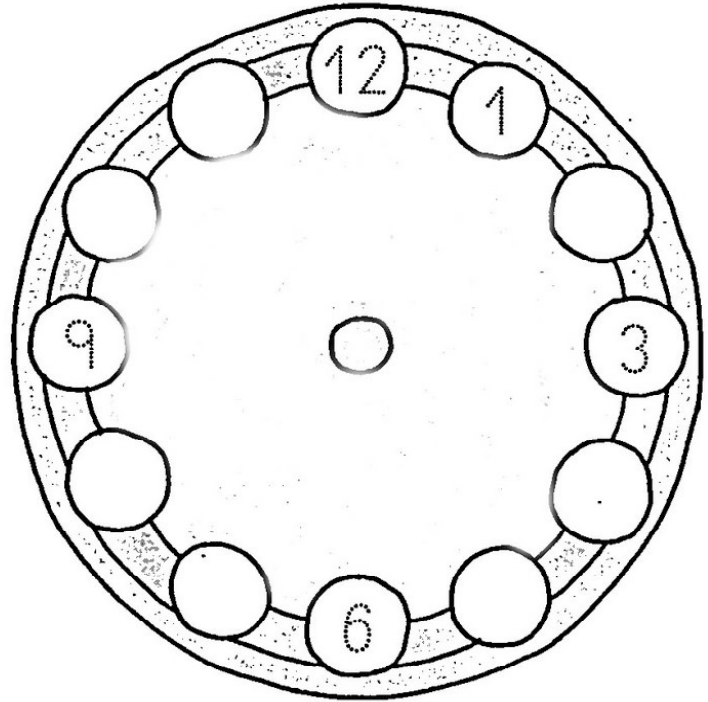


# RELOJ


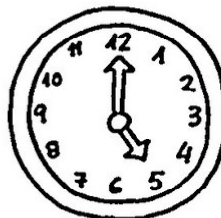


Completa el reloj



Son las 2.



Escribe qué hora marca cada reloj y continúa las series







Las \_\_\_\_\_

Las \_\_\_\_\_

Las \_\_\_\_\_

Las \_\_\_\_\_



La \_\_\_\_\_

Las \_\_\_\_\_

Las \_\_\_\_\_

Las \_\_\_\_\_

y \_\_\_\_\_

y \_\_\_\_\_

y \_\_\_\_\_

y \_\_\_\_\_