


SEGUNDO TRIMESTRE

Unidad 1. Matemáticas

AR

Nombre y apellidos:

Curso: Fecha:

 Une según corresponda.

$$20 + 9$$

$$24$$

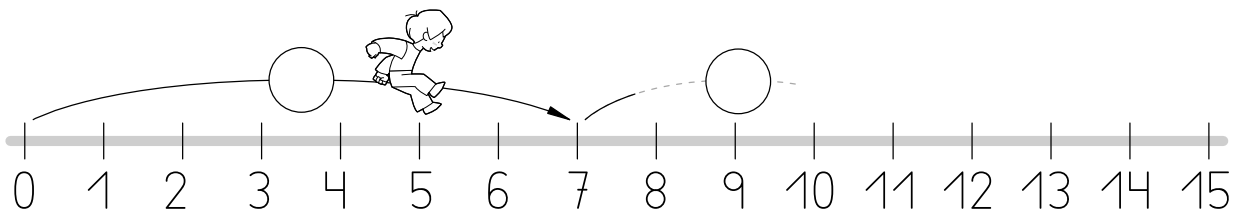
$$20 + 4$$

$$29$$

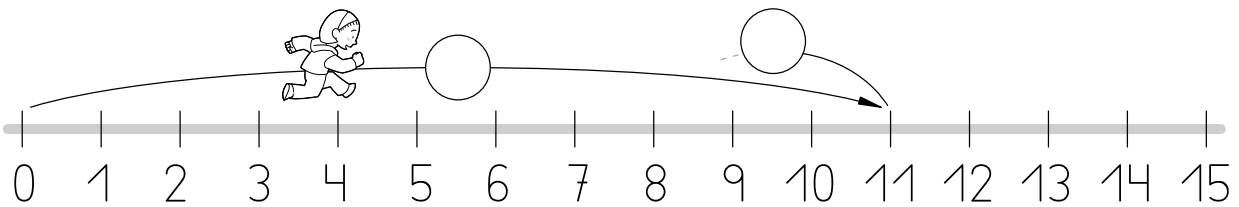
$$20 + 7$$

$$27$$


 Completa.



$$7 + 4 = \square$$



$$11 - 3 = \square$$

 Suma y resta.

$$\begin{array}{r} 7 \\ + 5 \\ \hline \square \end{array}$$

$$\begin{array}{r} 8 \\ - 2 \\ \hline \square \end{array}$$

$$\begin{array}{r} 9 \\ + 9 \\ \hline \square \end{array}$$

$$\begin{array}{r} 9 \\ - 6 \\ \hline \square \end{array}$$

$$\begin{array}{r} 3 \\ + 1 \\ \hline \square \end{array}$$